

Name: _____

Student No.: _____

CHEE210 Winter 2008 Quiz #1

Instructor: Dr. Brant A. Peppley, P.Eng., B.Sc, B.Ed., M.Sc., Ph.D.

Date: Thursday, 31 January 2008.

Closed book. All thermodynamic equations you will need are included in the statement of the problem. Answer all questions on the pages provided. Use the back of pages if necessary being sure to mark the problem number and section on the additional work. Write your name and student number on each page. (Time: 60 minutes)

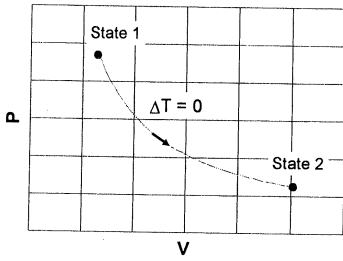
(Values for $R = 8.314 \text{ J mol}^{-1} \text{ K}^{-1} = 82.06 \text{ cm}^3 \text{ atm mol}^{-1} \text{ K}^{-1} = 0.08206 \text{ L atm mol}^{-1} \text{ K}^{-1}$)

- | | Marks |
|---|-------|
| 1. Each morning Dr. Peppley wakes up, gets dressed in a dashing athletic outfit and works out for 20 minutes on his Infiniti elliptical trainer equipped with a watt meter and cumulative calorie meter. On a typical day, Dr. Peppley generates power at a rate of 180 watts during the workout and the calorie accumulator registers that 320 calories of energy have been produced at the end of 20 minutes. | |
| a) How many joules of energy did Dr. Peppley actually generate in the 20 minute period based on the watt meter? | (5) |
| b) A calorie is approximately equivalent to 4.18 J. Is the calorie accumulator correct? What should it read? | (5) |
| c) During the months of December and January last year Dr. Peppley's electrical bill indicated that 1650 kWh were consumed over a 60 day period. How many hours would Dr. Peppley need to workout on the elliptical trainer to provide one average day's worth of electrical energy for his house? | (5) |

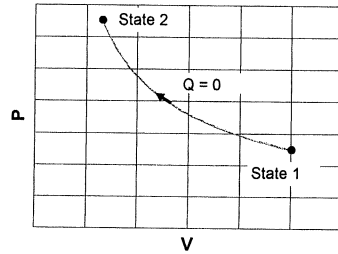
Name: _____

Student No.: _____

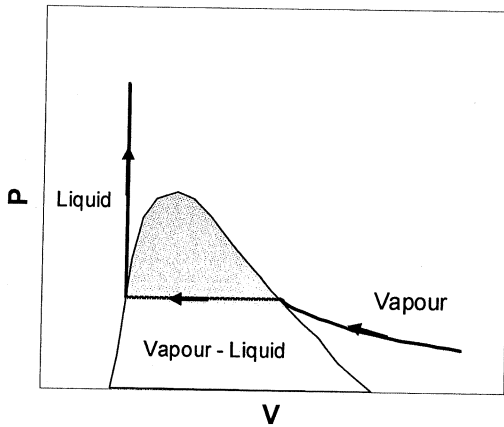
2. For each of the following P-V Diagrams give a brief description of the process that is occurring (e.g., reversible constant pressure expansion.).



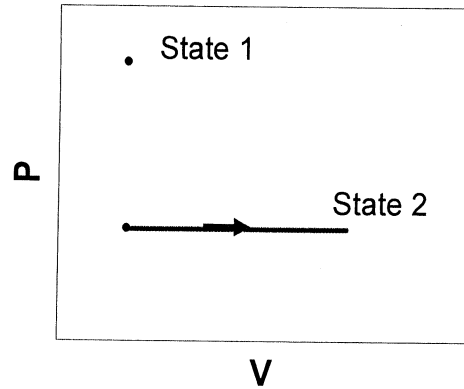
(a) _____



(b) _____



(c) _____



(d) _____

Name: _____

Student No.: _____

3. (a) Calculate the molar volume of oxygen at 20°C and 20 atm using the Redlich-Kwong Equation. $T_C(\text{O}_2) = 154.6 \text{ K}$, $P_C(\text{O}_2) = 50.43 \text{ atm}$. (25)

$$P = \frac{RT}{V - b} - \frac{a}{V(V + b)}$$

$$a = 0.42748 \frac{R^2 T_C^2}{T_R^{0.5} P_C} \quad \text{and} \quad b = 0.08664 \frac{RT_C}{P_C}$$

- (b) Based on the value of the volume calculated in part (a) what is the estimated value of the compressibility factor, Z . (recall $PV_{\text{act}} = ZRT$)? (5)

Name: _____

Student No.: _____

- 4 An ideal gas initially at 600 K and 10 bar undergoes a four-step mechanically reversible cycle in a closed system. In Step 12, pressure decreases isothermally to 3 bar; in Step 23, pressure decreases at constant volume to 2 bar; in Step 34, volume decreases at constant pressure; and in Step 41, the gas returns adiabatically to its initial state. Take $C_p = 7/2R$ and $C_v = 5/2R$.

Some Useful Equations (Note you may need to use two equations to get the equation you need):

$$\Delta U = Q + W$$

$$PV = RT$$

$$dW = -P_{\text{ext}}dV$$

$$\text{Isothermal Work: } W = RT \ln\left(\frac{P_2}{P_1}\right) = RT \ln\left(\frac{V_1}{V_2}\right)$$

$$\text{Adiabatic Work: } W = \frac{RT_2 - RT_1}{\gamma - 1} = \frac{P_2 V_2 - P_1 V_1}{\gamma - 1}$$

Adiabatic Equations: $\gamma = C_p/C_v$

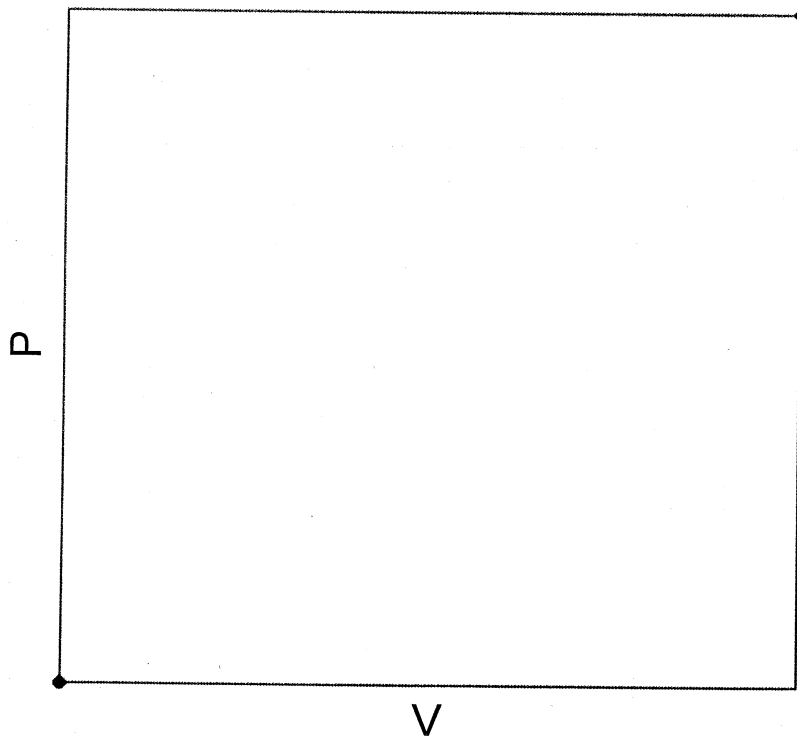
$$P_1 V_1^\gamma = P_2 V_2^\gamma$$

$$T_1 V_1^{\gamma-1} = T_2 V_2^{\gamma-1}$$

$$T_1 P_1^{\frac{1-\gamma}{\gamma}} = T_2 P_2^{\frac{1-\gamma}{\gamma}}$$

(a) Sketch the cycle on a PV diagram.

(5)



Name: _____

Student No.: _____

4

(b) Calculate Q , W , ΔU , ΔH for each step in the cycle. (20)

(c) For the complete cycle W_{Cycle} , Q_{Cycle} , ΔU_{Cycle} , ΔH_{Cycle} . (5)